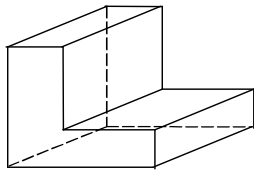



**8A Sketch a solid when given the top, side, and front views**

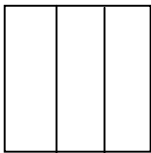
1. Which picture represents this solid when viewed from above?



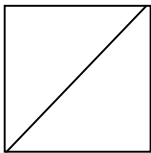
**A**



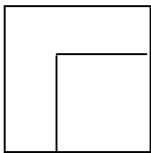
**B**




**C**



**D**



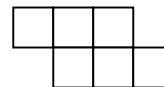
2. Which picture represents this stack of cubes when viewed from above?



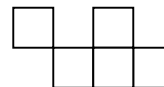
**A**



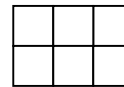
**B**



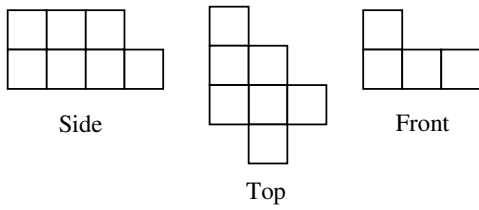
**C**



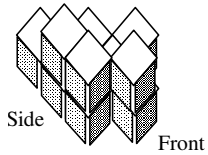
**D**



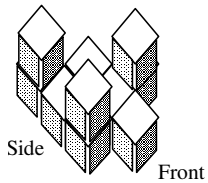
3. Which solid represents these side, top, and front views?



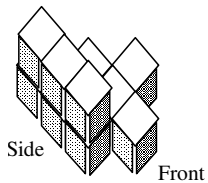
**A**



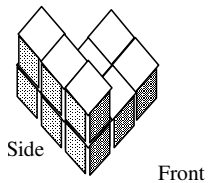
**B**



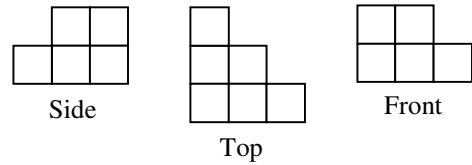
**C**



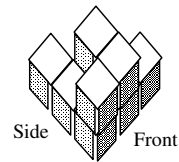
**D**



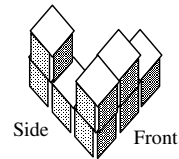
4. Which picture represents this stack of cubes when viewed from above?



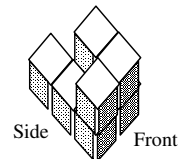
**A**



**B**



**C**



**D**

