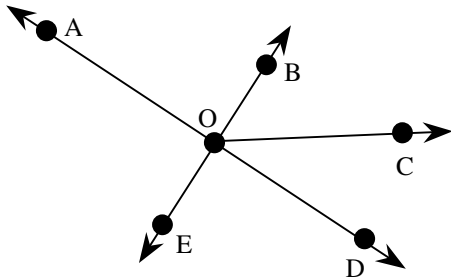


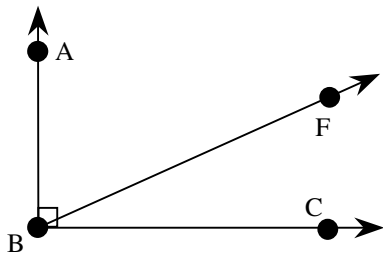
6A Use angle measurements to classify angles as complementary or supplementary

1. Which is a pair of supplementary angles?



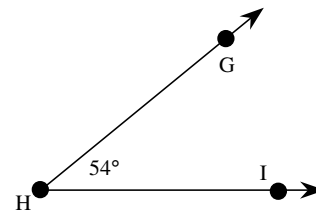
- A $\angle AOB$ and $\angle BOC$
- B $\angle BOC$ and $\angle EOD$
- C $\angle AOE$ and $\angle EOD$
- D $\angle EOD$ and $\angle DOC$

2. If $\angle ABF$ measures 36° , what is the measure of $\angle FBC$?



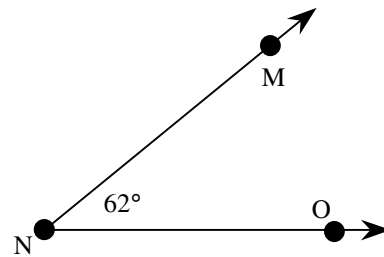
- A 90°
- B 64°
- C 54°
- D 36°

3. What is the measure of the angle that is supplementary to $\angle GHI$?



- A 36°
- B 90°
- C 126°
- D 180°

4. What is the measure of the angle that is complementary to $\angle MNO$?



- A 28°
- B 38°
- C 118°
- D 128°