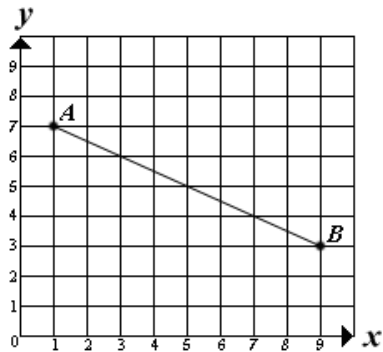


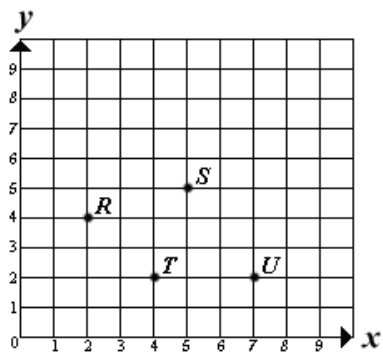
7 Locate and name points on a coordinate plane

5. Which point is on the line AB?



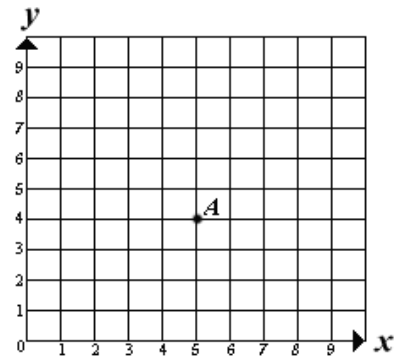
- A (3, 6)
- B (4, 7)
- C (7, 3)
- D (4, 4)

6. Which point on the graph below is located at the coordinates (4, 2)?



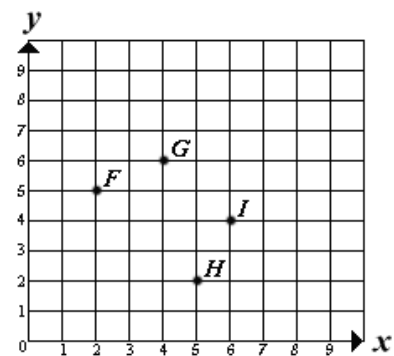
- A R
- B S
- C T
- D U

7. What are the coordinates of point A?



- A (2, 7)
- B (5, 4)
- C (4, 5)
- D (7, 2)

8. Which point on the graph below is located at the coordinates (6, 4)?



- A F
- B G
- C H
- D I