



3B Represent ratios and percents with concrete models, fractions, and decimals

25. What is the ratio of black squares to white squares?




- A $\frac{1}{3}$
- B $\frac{1}{2}$
- C $\frac{2}{3}$
- D $\frac{3}{2}$

26. What percent of the diagram below is shaded?



- A 6 %
- B 12 %
- C 18 %
- D 24 %

27. What fraction of the diagram is shaded?



- A $\frac{1}{4}$
- B $\frac{10}{37}$
- C $\frac{1}{5}$
- D $\frac{13}{50}$

28. There are 300 sixth graders at Rio Middle School this year. If 48 sixth graders attend a field trip, what percent of the sixth graders go on the trip?

- A 48 %
- B 24 %
- C 16 %
- D 12 %